

Name : _____

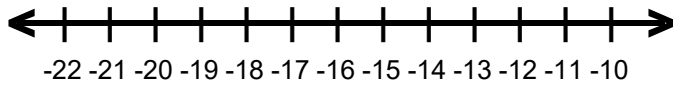
Score : _____

Teacher : _____

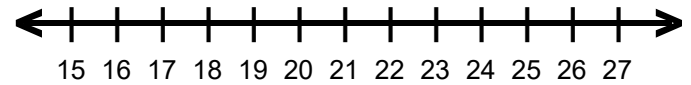
Date : _____

Solve and Graph the Inequalities

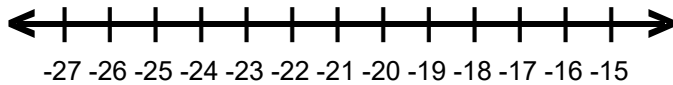
1) $-1 + z > -19$



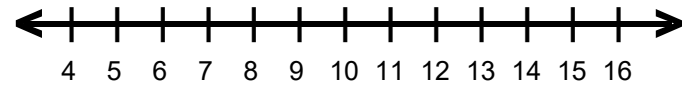
6) $s - 6 > 13$



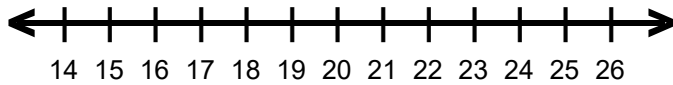
2) $9 + r < -11$



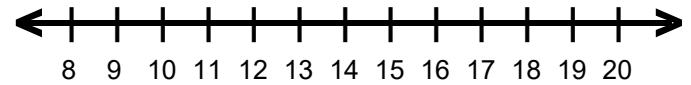
7) $17 \geq 3 + x$



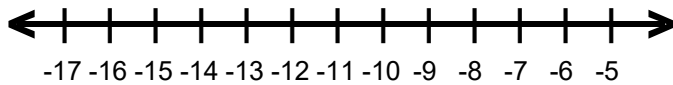
3) $p - 5 < 18$



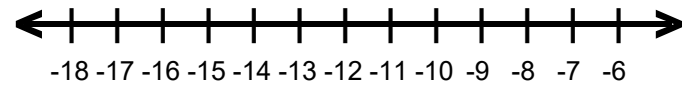
8) $15 \geq 4 + f$



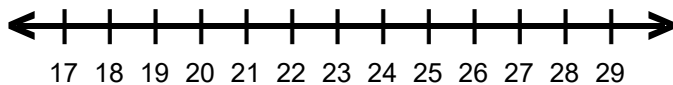
4) $-16 > c - 4$



9) $-9 \leq 7 + g$



5) $16 \leq v - 5$



10) $n + 6 \leq -18$

